

Werkkaart, Vrydag, 8 Mei 2020

1. Skryf die tye wat op die horlosies aangedui word in woorde.

a)



b)



c)



d)



a) \_\_\_\_\_

b) \_\_\_\_\_

c) \_\_\_\_\_

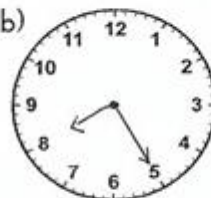
d) \_\_\_\_\_

2. Skryf die tye wat op die analoghorlosies aangedui word as digitale tyd.

a)




b)




c)

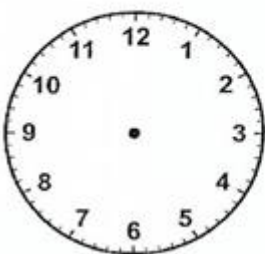



d)

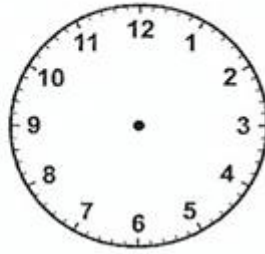



3. Vul die korrekte tye op die horlosies in.

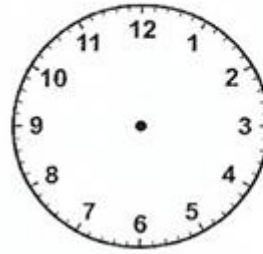
a) 08:35



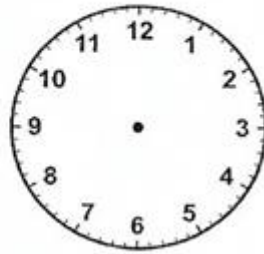
b) 08:15



c) 11:25



d) 12:55



MEMORANDUM

1a) 25 voor 10

1b) kwart oor 9

1c) half 12

1d) 10 oor 7

2a) 03:50 of 15:50

2b) 08:25 of 20:25

2c) 03:40 of 15:40

2d) 10:10 of 22:10

3a)



3b)



3c)



3d)

